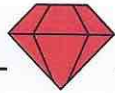


Name: _____

Primary 5-a-day

Ruby



20th February

$3 - 1 =$

2

$5 + 10 =$

15

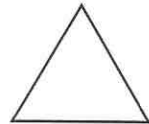
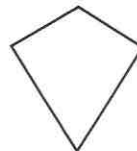

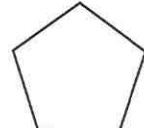
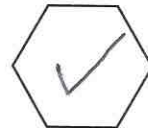
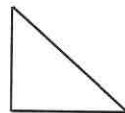
$10 - 4 =$

6

$20 - 1 =$

19

Tick the shape with the most sides.



Rory has 8 toys.

Arlo has 4 toys.

Theo has 3 toys.

How many toys do they have altogether?

$8 + 4 + 3 = 15$

15

Here are some number cards.

11

10

6

9

Choose two of the number cards to make this correct.

9

-

6

=

3