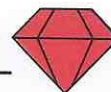


Name: _____

Primary 5-a-day

Ruby



9th February

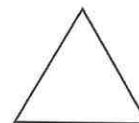

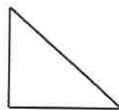

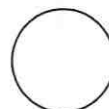
$1 + 13 = \boxed{14}$

$9 - 8 = \boxed{1}$

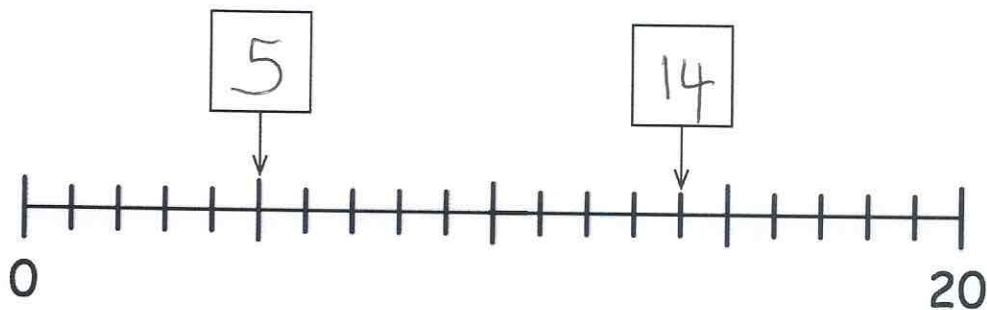
$10 + 10 = \boxed{20}$

$11 - 4 = \boxed{7}$

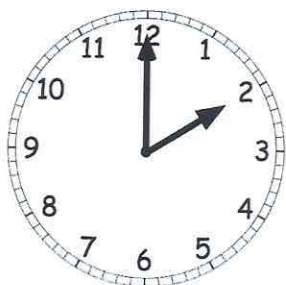
Tick the squares.



Write the missing numbers in the boxes.



What time does the clock show?
Tick the correct box.



1 o'clock

3 o'clock

12 o'clock

2 o'clock