

Name: _____

Primary 5-a-day

Ruby



10th January

$2 + 3 =$

$20 - 3 =$

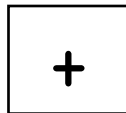
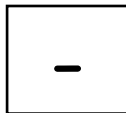
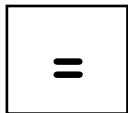
$2 + 2 + 2 =$

$7 + 8 =$

How much money is there?

 p

Here are some signs.



Write a sign in each box to make this correct.

12

8

4

Show the time **5 o'clock** on the clock.

