

Name: \_\_\_\_\_

Primary 5-a-day

Ruby



16th January




$2 + 3 =$

$10 - 9 =$

$9 - 6 =$

$5 + 10 + 5 =$

Tick the box with the **most** balls.



Peter has a 10p coin.

He buys a sweet for 5p.

How much change will he get back?

 p

Write these numbers in the correct box.

6

9

7

2

even numbers

odd numbers