

Name: _____

Primary 5-a-day

Ruby



26th January

$11 + 1 =$

$1 + 3 =$

$10 - 3 =$

$= 5 + 8$

Put the giraffes in order of height, from shortest to tallest.

shortest

tallest



A






B



C

Three dice are rolled.

How many dots are shown in total?



Write down 3 **even numbers**.