

Name: _____

Primary 5-a-day

Ruby



27th January

$1 + 13 =$

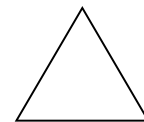
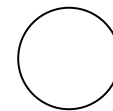
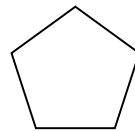
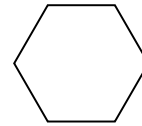
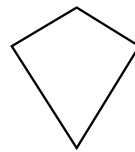
$2 + 6 =$

$2 =$

$- 5$

Double 3

Tick the two shapes with the same number of sides.



Freddy has 10 sweets.

He gives his dad some of his sweets.

Freddy has 3 sweets left.

How many sweets did Freddy give his dad?

Write an **odd number** between 8 and 12.