

Name: _____

Primary 5-a-day

Ruby



4th January

$2 + 4 =$

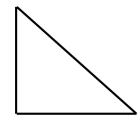
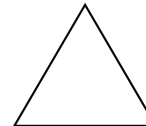
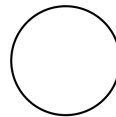


$1 +$

$= 4$

$5 + 6 =$

$+ 4 = 20$

Tick the circles.



eighty-two

fifteen

twenty-six

15

82

26

50

62

There are 15 sweets in a jar.

7 sweets are taken out of the jar.

How many sweets are left?