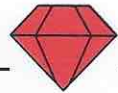


Name: _____

Primary 5-a-day

Ruby



15th January

$3 - 3 =$

0

$9 + 4 =$

13

$16 + 2 =$

18

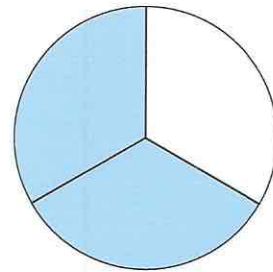
Double 4

8


Is half of this shape shaded?

Yes

No



Tick the box that has 16p



Here is a pattern of shapes.



?

Circle the missing shape.

