

Name: \_\_\_\_\_

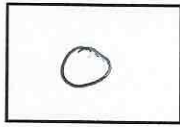
Primary 5-a-day

Ruby




18th January

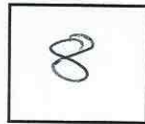
$8 - 8 =$



$12 - 1 =$




$2 +$



$= 10$

$19 - 4 =$

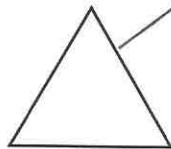


Match the shapes to their name.

circle

triangle

square



Poppy has 8 pens.

Ava has 3 pens.

How many more pens does Poppy have than Ava?

$8 - 3 = 5$

5

Write six **different** numbers in the boxes to make these correct.

$\boxed{5} + \boxed{15} = 20$

$\boxed{10} + \boxed{10} = 20$

$\boxed{18} + \boxed{2} = 20$