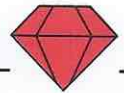


Name: _____

Primary 5-a-day

Ruby



22nd January

$5 + 2 =$

7

$3 + 8 =$

11

$20 - 15 =$

5

$17 - 6 =$

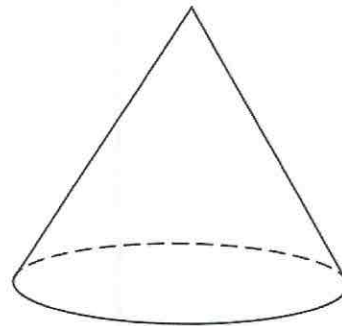
11

Tick the name of the shape.

Cuboid

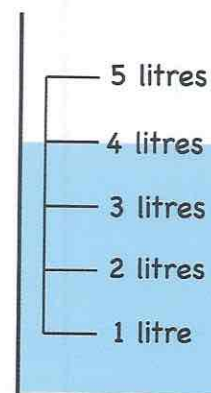
Cone ✓

Cube



How much water is in the jug?

4 litres



A seedling is 8 centimetres tall.

The seedling grows 5 centimetres.

How tall is the seedling now?

$8 + 5 = 13$

13 centimetres