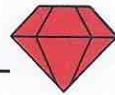


Name: _____

Primary 5-a-day

Ruby



26th January

$11 + 1 = \boxed{12}$

$1 + 3 = \boxed{4}$

$10 - 3 = \boxed{7}$

$\boxed{13} = 5 + 8$

Put the giraffes in order of height, from shortest to tallest.

\boxed{A}

\boxed{C}

\boxed{B}

shortest

tallest



A




B

C

Three dice are rolled.

How many dots are shown in total?

$4 + 4 + 5 = \underline{\underline{13}}$



Write down 3 **even** numbers.

$\boxed{2}$

$\boxed{6}$

$\boxed{10}$