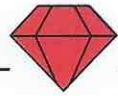


Name: _____

Primary 5-a-day

Ruby



3rd January

$1 + 8 =$

9

9

$- 2 = 7$


$5 + 5 =$

10

$13 - 7 =$

6

How many flowers are there?



13

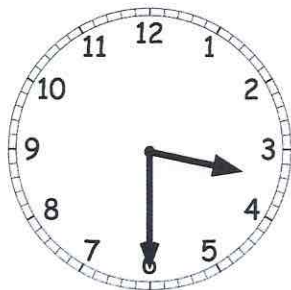
Fill in the missing number to make this pair of cards have a total of 15.

9 6

Fill in the missing number to make this pair of cards have a total of 15.

13 2

What time does the clock show?
Tick the correct box.



3 o'clock

half past 3 ✓

4 o'clock

half past 4