

Name: \_\_\_\_\_

Primary 5-a-day

Ruby



22nd July

$17 + 1 =$

$6 + 9 =$

$5 + 8 =$

$12 + 6 =$




Walter bakes 15 cupcakes.

He gives 9 cupcakes away.

How many are left?



Tick the shape that has **one quarter** shaded.



Show the time **2 o'clock** on the clock.

