

Name: _____

Primary 5-a-day

Ruby



3rd July



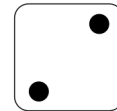


$5 + 2 =$

$13 - 1 =$

$10 + 5 =$

$7 + 9 =$

Circle the two dice that add up to 8



Tick the number **ninety**

9

19

90

Nora has 3 apples.

Emily has 8 apples.

Zoe has 5 apples.

How many apples do they have altogether?