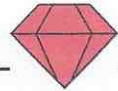


Name: _____

Primary 5-a-day

Ruby



13th July

$1 + 2 + 3 =$

6

$8 + 2 =$

10

$6 +$

5

$= 11$

$9 + 10 =$

19

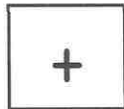

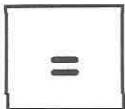
Put a tick (✓) above the penguin that is 6th in the line.



start

end

Here are some signs.



Write a sign in each box to make this correct.

$6 \quad \boxed{+} \quad 6 \quad \boxed{=} \quad 12$

There are 20 cars in a car park.

15 cars leave the car park.

3 cars enter the car park.

How many cars are now in the car park?

$20 - 15 = 5$

$5 + 3 = 8$

8