


Name: _____

Primary 5-a-day

Ruby 

26th July

$8 - 8 =$

Half of 4 is

$6 + 10 =$

$18 - 9 =$

Put the lines in order of length, from shortest to longest.

shortest

longest

A 

B 

C 




D 

How many dots are shown altogether on the four dice?

$4 + 3 = 7$

$4 + 5 = 9$

$7 + 9 = 16$



Tick the clock that shows **eight o'clock**.

