

Name: _____

Primary 5-a-day

Ruby



14th June


$8 + 1 =$

$10 + 7 =$

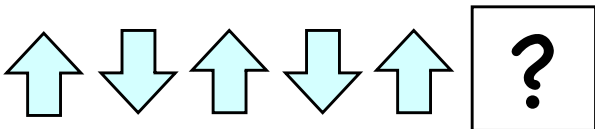
$10 - 9 =$

$10 + 5 + 5 =$

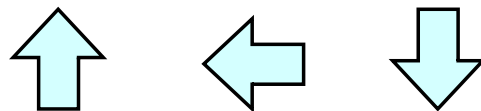
How many dots are there altogether?



Here is a pattern of shapes.



Circle the missing shape.



Write the missing number in the box.

$9 + 6 = 20 -$