

Name: _____

Primary 5-a-day

Ruby



8th June






$1 + 3 =$

$8 - 3 =$

$7 + 2 =$

$15 - 10 =$

Circle the two dice that add up to 8



Fill in the missing number to make this pair of cards have a total of 16.

11	
----	--

Fill in the missing number to make this pair of cards have a total of 16.

	6
--	---

Emily hits the ball 19 metres.
Rosie hits the ball 10 metres.



How much further does Emily hit the ball than Rosie?

metres