

Name: _____

Primary 5-a-day

Ruby



13th June

$3 + 2 =$

5

$2 + 6 =$

8


1

$= 18 - 17$


$12 + 2 + 2 =$

16


Tick the box with the **fewest** balls.



4



3



5

Tick the number that is **not** spelt correctly.

17
seventeen

12
eleven

60
sixty

This picture shows $1 + 3 = 4$

4	
1	3

Here is another picture.
Write the missing number in the box.

15	
12	3