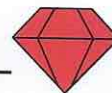


Name: _____

Primary 5-a-day

Ruby



19th June

$1 + 16 =$

17

$5 + 3 =$

8

$9 -$


7

$= 2$

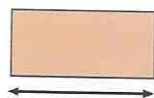
$9 + 9 =$

18

Tick the **tallest** penguin.

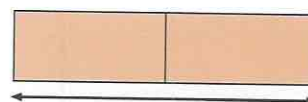


Here is a wooden block.



3 centimetres

How long would two wooden blocks be?



?

6 centimetres

Show the time **5 o'clock** on the clock.

