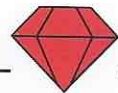


Name: \_\_\_\_\_

Primary 5-a-day

Ruby



26th June

$2 + 2 =$

4

$4 + 9 =$

13

$10 - 5 =$

5

$18 - 3 =$

15

Circle the largest number.

9

11

5

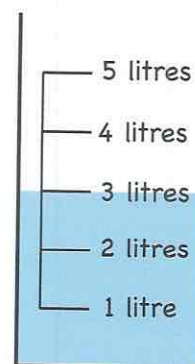
12

8

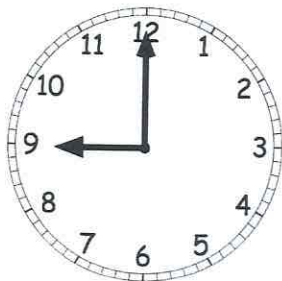
7

How much water is in the jug?

3 litres



What time does the clock show?  
Tick the correct box.



12 o'clock

half past 9

9 o'clock ✓

half past 12