

Name: _____

Primary 5-a-day

Ruby



1st June

$6 + 1 =$

$10 - \quad = 5$

$19 - 2 =$

$8 + 7 =$

Add together 4 and 5.

Tick the box that has 20p



Finn has 14 cookies.

Dara has 5 cookies.

How many cookies do they have altogether?

Name: _____

Primary 5-a-day

Ruby



2nd June

$1 + 9 =$

$8 - 0 =$

$3 + 9 =$

$5 + 5 + 5 =$

Write down the number that is **one less** than 50.

Here are some signs.

Write a sign in each box to make this correct.

11

3

8

Count up in twos.

Name: _____

Primary 5-a-day

Ruby



3rd June

$8 + 2 =$

$\square + 5 = 10$

$9 - 4 =$

$7 + 7 =$

Pip has 3 sunflowers.



Sophie has 7 sunflowers.



How many sunflowers do they have altogether?

Match the numbers that **add to 20**

16

13

11

12

4

8

9

7

Write a number in each box to make a correct calculation.

+

1

+

=

15

Name: _____

Primary 5-a-day

Ruby



4th June

$6 - 3 =$

Half of 2 is

$2 + 8 =$

$9 + 8 =$

Tick the day before Tuesday.

Sunday

Wednesday

Friday

Monday

Write the correct number in each box.

26 is 1 less than

30 is 1 more than

Write 3 numbers to make this calculation correct.

$$\square + \square + \square = 16$$

Name: _____

Primary 5-a-day

Ruby



5th June

$2 + 5 =$

Double 6

$9 - 8 =$

$20 -$ $= 11$

Tick the calculation with the largest answer.

$4 + 3$

$10 - 2$

$8 - 1$

$1 + 6$

Jessica has 11 tennis balls.

Anna has 3 tennis balls.

How many more tennis balls does Jessica have than Anna?

Circle all the **odd** numbers.

7

4

6

3

8

2

Name: _____

Primary 5-a-day

Ruby



6th June

$3 + 5 =$

$2 + 9 =$

$8 - 2 =$


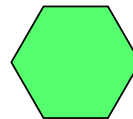
$16 + 3 =$

Write down the whole number that is between 22 and 24.

Here is a pattern of shapes.



Circle the missing shape.



How much money is there?

 p

Name: _____

Primary 5-a-day

Ruby



7th June

$1 + 1 =$

$10 - 3 =$

$4 + 8 =$

Double 5

twenty-six

fifty-two

thirteen

26

52

13

30

25

Write the number that is
5 more than 20

Write the number that is
5 less than 35

There are 6 people on a bus.
7 people get on the bus.
Then 3 more people get on the bus.
How many people are now on the bus?

Name: _____

Primary 5-a-day

Ruby



8th June





$1 + 3 =$

$8 - 3 =$

$7 + 2 =$

$15 - 10 =$

Circle the two dice that add up to 8



Fill in the missing number to make this pair of cards have a total of 16.

Fill in the missing number to make this pair of cards have a total of 16.

Emily hits the ball 19 metres.
Rosie hits the ball 10 metres.



How much further does Emily hit the ball than Rosie?

Name: _____

Primary 5-a-day

Ruby



9th June


$2 + 1 =$

$4 + 5 =$

$10 - 1 =$

$12 - 2 =$

How many balls are there?



Write the number **sixty-five** in figures.

Ava has 9 coins.

Harper has 3 coins.

Violet has 6 coins.

How many coins do they have altogether?

Name: _____

Primary 5-a-day

Ruby



10th June

$2 + 1 =$

$9 + 3 =$

$10 -$

$= 6$

$12 - 6 =$

Tick the correct answer.


$5 + 5 = 11$

$9 - 1 = 7$

$6 + 3 = 8$

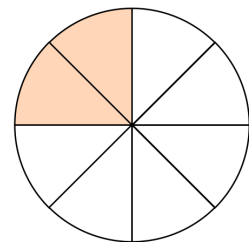
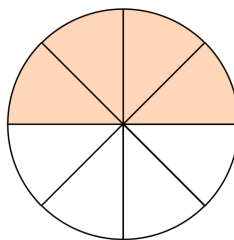
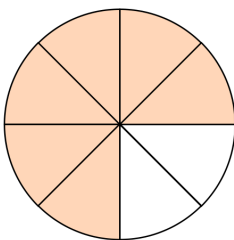
$7 - 4 = 3$

Jacob has 18 strawberries.
He then eats some strawberries.
Here is how many he has left.



How many strawberries did Jacob eat?

Tick the circle that has **half** shaded.



Name: _____

Primary 5-a-day

Ruby



12th June


$8 - 2 =$

$10 + 10 =$

$6 + 11 =$

$17 - 3 =$

What number is **1 more** than the number on the dice?

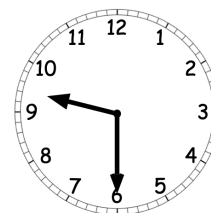
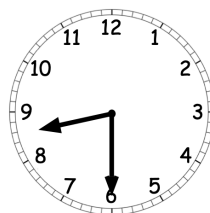
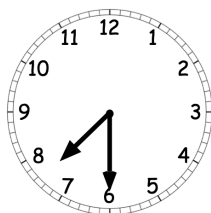
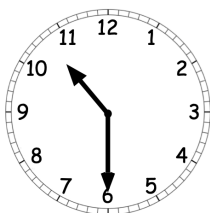


There are 13 apples in a box.

5 of the apples are red and the rest are green.

How many green apples are there?

Tick the clock that shows **half past nine**.



Name: _____

Primary 5-a-day

Ruby



13th June


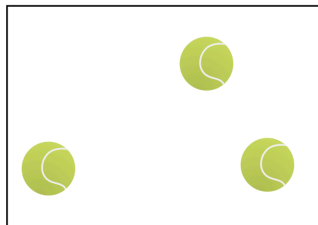

$3 + 2 =$

$2 + 6 =$

$= 18 - 17$

$12 + 2 + 2 =$

Tick the box with the **fewest** balls.



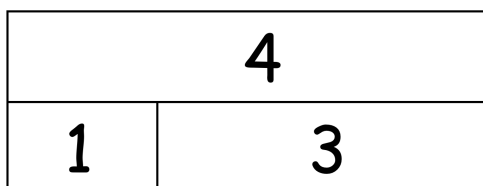
Tick the number that is **not** spelt correctly.

17
seventeen

12
eleven

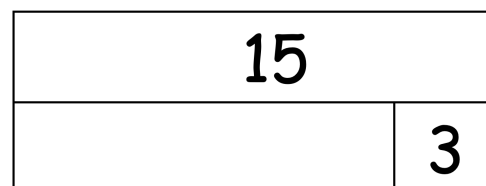
60
sixty

This picture shows $1 + 3 = 4$



Here is another picture.

Write the missing number in the box.



Name: _____

Primary 5-a-day

Ruby



14th June


$8 + 1 =$

$10 + 7 =$

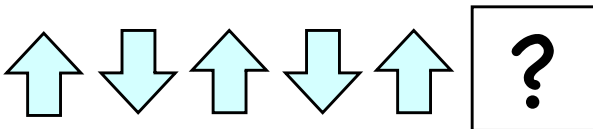
$10 - 9 =$

$10 + 5 + 5 =$

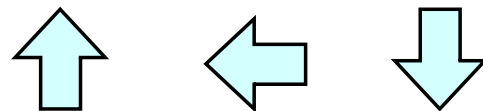
How many dots are there altogether?



Here is a pattern of shapes.



Circle the missing shape.



Write the missing number in the box.

$9 + 6 = 20 -$

Name: _____

Primary 5-a-day

Ruby



15th June

$2 + 6 =$

$3 + 12 =$

$\square + 6 = 10$

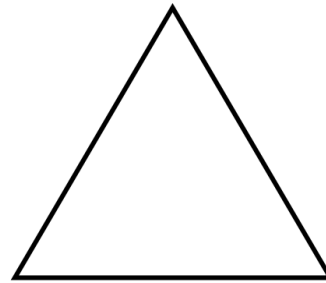
$4 + 9 =$

Tick the name of the shape.

Rectangle

Circle

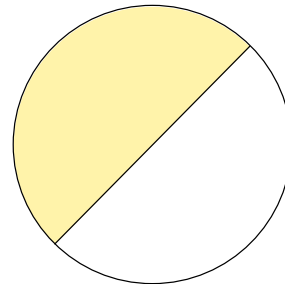
Triangle



Is half of this shape shaded?

Yes

No



Write the missing number in the box.

$4 + 8 - \square = 9$

Name: _____

Primary 5-a-day

Ruby



16th June

$1 + 4 =$

$13 - 13 =$

$9 + 6 =$

$15 =$

$- 5$

There are 10 dogs in a park.

4 of the dogs leave.

How many dogs are left?

Tick the day that comes in between Sunday and Tuesday.

Wednesday

Saturday

Monday

A shop sells

an apple for 10p

a banana for 7p

a strawberry for 3p

a cherry for 2p

Find the cost of



p

Name: _____

Primary 5-a-day

Ruby



17th June

$2 + 3 =$

$4 + 5 =$

$16 - 4 =$

$9 + 11 =$

Make each statement correct by writing **more** or **less** in each box.

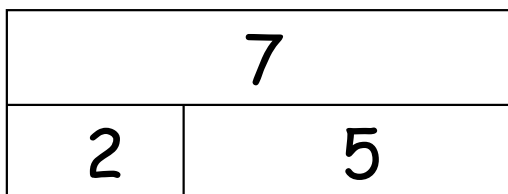
77 is than 50

70 is than 6


68 is than 73

How many days are there in one week?

This picture shows $2 + 5 = 7$



Here is another picture.
Write the missing number in the box.



Name: _____

Primary 5-a-day

Ruby



18th June

$1 + 6 =$

$10 - 2 =$

$8 + 10 =$

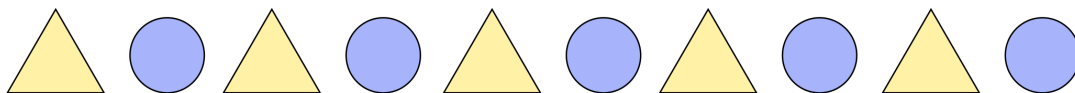
$4 + 4 + 4 =$

Put these numbers in order, from smallest to biggest.

smallest

biggest

Put a tick (✓) above the 4th circle in the line.



Noah has 8 toys.

Leo has **6 more** toys than Noah.

How many toys does Leo have?

Name: _____

Primary 5-a-day

Ruby



19th June

$1 + 16 =$


$5 + 3 =$

$9 -$

$= 2$

$9 + 9 =$

Tick the **tallest** penguin.



Here is a wooden block.



3 centimetres

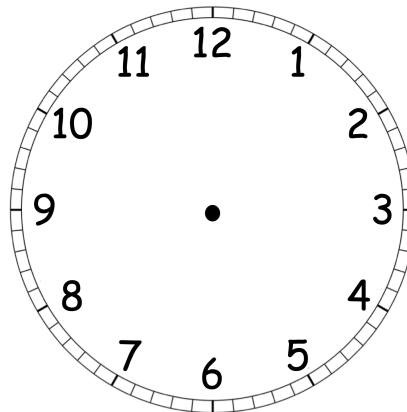
How long would two wooden blocks be?



?

centimetres

Show the time **5 o'clock** on the clock.



Name: _____

Primary 5-a-day

Ruby



20th June

$3 - 1 =$

$6 - 4 =$

$17 - 5 =$

$14 - 8 =$

Which of these numbers is **more than** 33 ?

41

30

28

There are 10 pens on a table.

6 pens are taken away.

How many pens are left on the table?

Write an **odd number** between 2 and 6.

Name: _____

Primary 5-a-day

Ruby



21st June

$8 + 2 =$

$10 - 1 =$

$13 - 4 =$

Double 1

Write the number that is **one more** than 20.

Anna and Ellie have 12 bananas.

Anna eats 3 bananas.

Ellie eats 4 bananas.

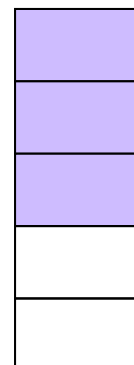
How many bananas are left?



Is half of this shape shaded?

Yes

No



Name: _____

Primary 5-a-day

Ruby



22nd June

$9 - 9 =$

$12 + 8 =$

$3 + 5 =$

$14 - 4 =$

How many sides does a rectangle have?



Jess has these coins.

How much money does she have?



p

Write down three numbers that have a **total of 17**

Name: _____

Primary 5-a-day

Ruby



23rd June

$18 + 1 =$

$8 + 4 =$

$5 + 3 =$

$10 - 6 =$

Bella has a 5p coin.

She buys a sweet for 2p

How much change will she get back?

p

Tick the number **sixteen**

66

60

16

Here are some number cards.

5

10

7

12

Choose two of the number cards to make this correct.

$\square - \square = 2$

Name: _____

Primary 5-a-day

Ruby



24th June

$6 - 2 =$

$6 + 6 =$

$10 -$

$= 1$

$2 + 2 + 2 + 2 =$

Put a tick (✓) above the dog that is 1st in the line.



start

end

Write four **different** numbers in the boxes to make these correct.

$\square - \square = 1$

$\square - \square = 1$

Isabel has 14 books.

Lexi has 5 books.

How many toffees do they have altogether?

Name: _____

Primary 5-a-day

Ruby



25th June

$1 + 7 =$

$\square + 3 = 10$



$18 + 2 =$

$7 + 9 =$

Circle the coin that has the **highest** value.



Match the object to its name.



Cone

Pyramid

Cube

Sphere

Samson has 17 apples.

He gives some of his apples to Dave.

Samson has 5 apples left.

How many apples did Samson give Dave?

Name: _____

Primary 5-a-day

Ruby



26th June

$2 + 2 =$

$4 + 9 =$

$10 - 5 =$

$18 - 3 =$

Circle the largest number.

9

11

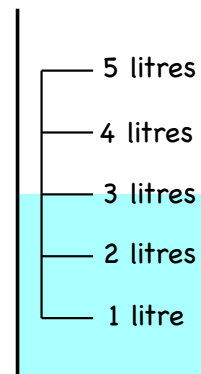
5

12

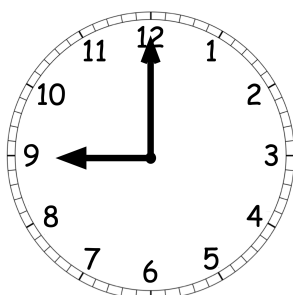
8

7

How much water is in the jug?

 litres

What time does the clock show?
Tick the correct box.



12 o'clock

half past 9

9 o'clock

half past 12

Name: _____

Primary 5-a-day

Ruby



27th June

$5 + 4 =$

$17 + 2 =$

$8 + 10 =$

$15 - 4 =$

Ben has these coins.

How much money does he have?



p

Write down the whole number that is between 92 and 94.

Write in the missing numbers in this pattern.

50

60

70

Name: _____

Primary 5-a-day

Ruby



28th June

$5 + 5 =$

$10 - 7 =$

$3 + 9 =$

$7 + 6 =$

Carter has 2 toffees.

Max has 4 toffees.

How many toffees do they have altogether?

Circle the coins that are worth **less than 5p**



Henry needs 18 carrots.

He only has 9 carrots.

How many more carrots does Henry need?

Name: _____

Primary 5-a-day

Ruby



29th June

$4 + 2 =$

$20 - 1 =$

$3 + 3 + 3 =$

$11 + 5 =$

Match the numbers that **add to 10**

4

0

3

1

7

9

6

10

Here are two signs.

-

+

Write a sign in each box to make each calculation correct.

$6 \square 2 = 4$

$20 \square 2 = 22$

Write these numbers in the correct box.

6

9

7

2

even numbers

odd numbers

Name: _____

Primary 5-a-day

Ruby



30th June

$9 - 1 =$

$5 + 3 =$

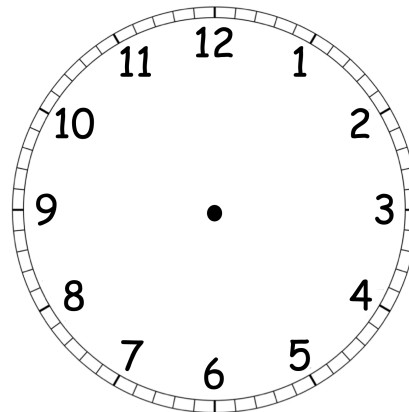
$2 + 18 =$

$14 + 5 =$

Put a tick in a square that is **2 squares left** of the shaded square.



Show the time **11 o'clock** on the clock.



There are 20 sweets in a jar.

3 sweets are red.

6 sweets are blue.

The rest of the sweets are green.

How many green sweets are in the jar?