

Name: \_\_\_\_\_

Primary 5-a-day

Ruby



24th March






$2 + 10 =$

$4 - 4 =$

$7 - 3 =$

$14 + 2 + 2 =$

Circle the two dice that add up to 11



Write the number **twenty**  
in figures.

Write in the missing numbers in this pattern.