

Name: _____

Primary 5-a-day

Ruby



31st March



$10 + 2 =$

$13 - 1 =$

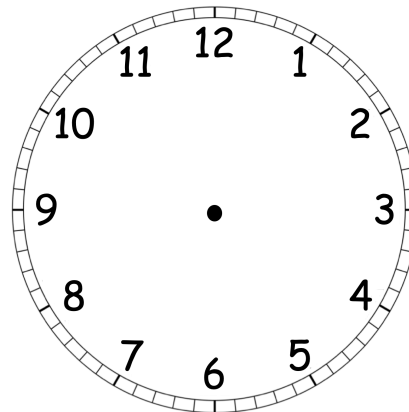
$18 - 6 =$

$8 + 8 =$

Which pencil is the **longest**?



Show the time **8 o'clock** on the clock.



Write in the missing numbers in this pattern.

100

90

80