

Name: _____

Primary 5-a-day

Ruby



9th March




$1 + 7 =$

$9 - 4 =$

$15 - 13 =$

$5 + 4 + 3 =$

Tick the box with the **fewest** balls.



Tick the correct answer.

$10 - 3 = 6$

$5 + 6 = 11$

$12 - 4 = 7$

$9 + 2 = 10$

There are 6 people on a bus.

7 people get on the bus.

Then 3 more people get on the bus.

How many people are now on the bus?