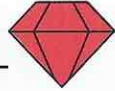


Name: \_\_\_\_\_

Primary 5-a-day

Ruby



11th March

$4 - 3 =$

1

$3 + 11 =$

14

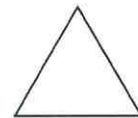
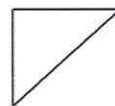

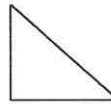
$5 + 5 =$

10

$8 + 6 =$

14

Tick the rectangles.



Beth has 13 stickers.

Jenny has 4 **fewer** stickers than Beth.

How many stickers does Jenny have?

$13 - 4 = 9$

9

Circle all the **even** numbers

6

11

10

2

7

1