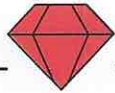


Name: _____

Primary 5-a-day

Ruby



19th March

$10 - 9 =$

$7 - 3 =$

$5 + 6 =$

$13 -$


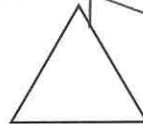
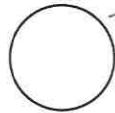
$= 2$

Match the shapes to their name.

rectangle

triangle

circle



Write six **different** numbers in the boxes to make these correct.

3

+

12

=

15

10

+

5

=

15

7

+

8

=

15

Write these numbers in the correct box.

8

5

12

3

even numbers

8

12

odd numbers

5

3