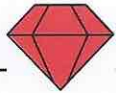


Name: _____

Primary 5-a-day

Ruby



26th March

$6 - 5 =$

1

$15 + 3 =$

18

$10 + 4 =$

14

$12 + 7 =$

19

Sam has 3 apples.



Cillian has 2 apples.

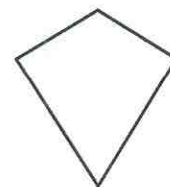
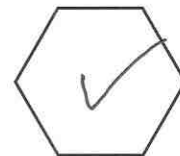
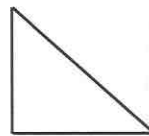


How many apples do they have altogether?

$3 + 2 = 5$

5

Tick the hexagon.



Write an **even number** between 5 and 9.

6 or 8