

Name: _____

Primary 5-a-day

Ruby



10th May


$8 - 4 =$

$7 + 4 =$

$9 - 7 =$

$19 - 11 =$

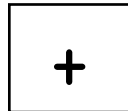
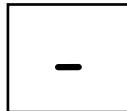

Put a tick (✓) above the chicken that is 5th in the line.



start

end

Here are some signs.



Write a sign in each box to make this correct.

15

9

6

Tom swims 18 metres.
Ben swims 14 metres.



How much further did Tom swim than Ben?

metres