

Name: _____

Primary 5-a-day

Ruby



13th May




$1 + 2 =$

$18 + 2 =$


$10 + 5 =$

$9 - 4 =$

Tick the box with the **fewest** balls.



Fill in the missing numbers to make this pair of cards have a total of 12.



Fill in the missing numbers to make this pair of cards have a total of 12.



Show the time **9 o'clock** on the clock.

