

Name: _____

Primary 5-a-day

Ruby



22nd May

$9 - 2 =$

$20 - 3 =$

$10 -$

$= 4$

$- 6 = 5$

Tick the calculation with the largest answer.


$6 + 2$

$10 - 1$


$4 + 4$

$9 - 2$


Circle the person with the most acorns.



Sam



Dan



Finn

There are 20 marbles in a jar.

15 marbles are taken out of the jar.

How many marbles are left?