

Name: _____

Primary 5-a-day

Ruby



30th May

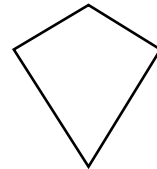
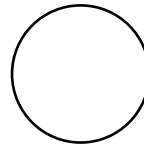
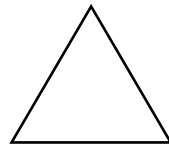
$1 + 3 =$

$10 + 4 =$

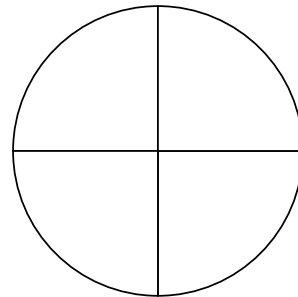
$20 - 10 =$

$19 - 17 =$

Tick the kite.



Shade a **quarter** of this shape.



Write 3 numbers to make this calculation correct.

$$\square + \square + \square = 20$$