

Name: _____

Primary 5-a-day

Ruby



1st May

$1 + 5 =$

$\square + 10 = 10$

$11 - 2 =$

$8 + 8 =$

Write in the missing numbers in this pattern.

54

52

51

Tick the box that has 18p



Write in the missing number in the box.

$7 + 7 - \square = 12$

Name: _____

Primary 5-a-day

Ruby



2nd May

$0 + 1 =$

$2 + 8 =$

$5 + 10 =$

$8 + 7 =$

35 is less than 24

True

False

98 is more than 94

True

False

How many days are there in one week?

Lucas needs 11 onions.

He only has 8 onions.

How many more onions does Lucas need?

Name: _____

Primary 5-a-day

Ruby



3rd May

$4 + 2 =$

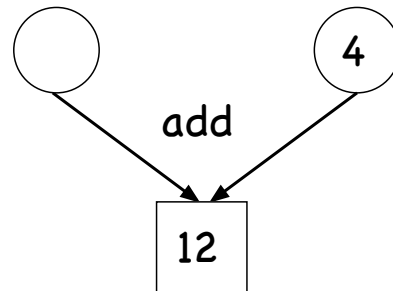
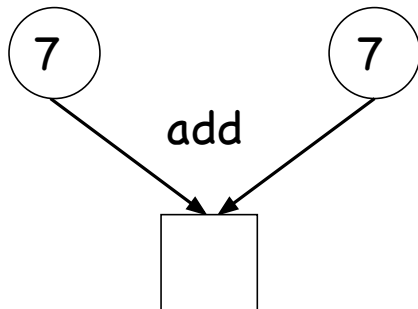
$10 - 1 =$

$6 + 9 =$

$14 - 7 =$

Write down the whole number that is between 13 and 15.

Write the missing numbers.



A movie started at 5 o'clock.
The movie ended at 8 o'clock.
How long did the movie last?

hours

Name: _____

Primary 5-a-day

Ruby



4th May

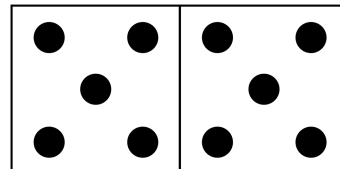
$2 + 3 =$

$13 - 3 =$

$6 + 5 =$

$6 + 10 =$

How many dots are there altogether?



Evie has a 10p coin.

She buys a sweet for 8p

How much change will she get back?

Write down three numbers that have a **total of 11**

Name: _____

Primary 5-a-day

Ruby



5th May

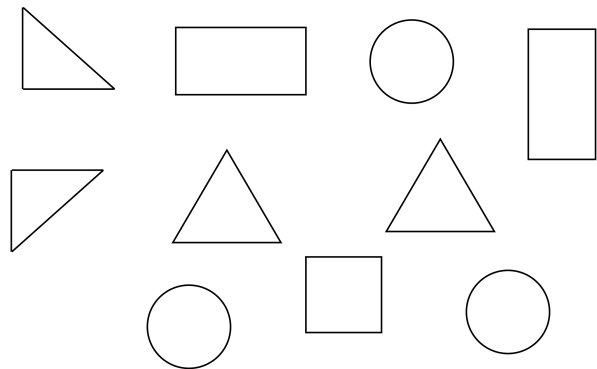
$8 - 2 =$

$3 + 7 =$

$6 + 5 =$

$19 - 8 =$

How many circles are there?



Chelsea has 18 bracelets.

Layla has 8 brackets.

How many more bracelets does Chelsea have than Layla?

Write six **different** numbers in the boxes to make these correct.

$\square + \square = 18$

$\square + \square = 18$

$\square + \square = 18$

Name: _____

Primary 5-a-day

Ruby



6th May

$$10 - \square = 9$$

$$4 - 1 = \square$$

$$5 + 12 = \square$$

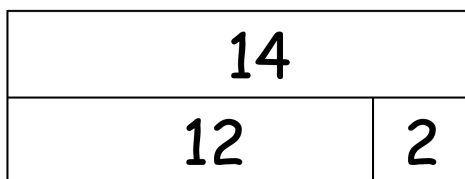
Double 8 \square

How many sides does a triangle have?

Count up in tens.


10					
----	--	--	--	--	--

This picture shows $12 + 2 = 14$



Here is another picture.

Write the missing number in the box.



Name: _____

Primary 5-a-day

Ruby



7th May

$1 + 2 =$

$2 +$

$= 5$


$16 - 1 =$

Double 2

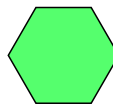
How many blocks taller is the large dog?



Here is a pattern of shapes.



Circle the missing shape.



Lily has 14 apples.

Poppy has **5 fewer** apples than Lily.

How many apples does Poppy have?

Name: _____

Primary 5-a-day

Ruby



8th May

$4 + 4 =$

$3 - 3 =$

$5 + 2 =$

$20 - \square = 5$

Tick the day after Friday.

Monday

Sunday

Saturday

Thursday

Write in the missing number in this pattern.

50

45

40

35

A shop sells

an apple for 10p

a banana for 9p

a strawberry for 4p

a cherry for 2p

Find the cost of



p

Name: _____

Primary 5-a-day

Ruby



9th May






$2 + 4 =$

$3 + 5 =$

$= 7 + 5$

$20 - 10 =$

Circle the two dice that add up to 7



Circle the coin that has the **lowest** value.



There are 9 apples in a box.

Finn puts 6 apples in the box.

Max puts 3 apples in the box.

How many apples are in the box altogether?

Name: _____

Primary 5-a-day

Ruby



10th May


$8 - 4 =$

$7 + 4 =$

$9 - 7 =$

$19 - 11 =$

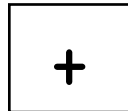
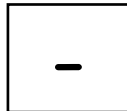

Put a tick (✓) above the chicken that is 5th in the line.



start

end

Here are some signs.



Write a sign in each box to make this correct.

15

9

6

Tom swims 18 metres.
Ben swims 14 metres.



How much further did Tom swim than Ben?

metres

Name: _____

Primary 5-a-day

Ruby



11th May

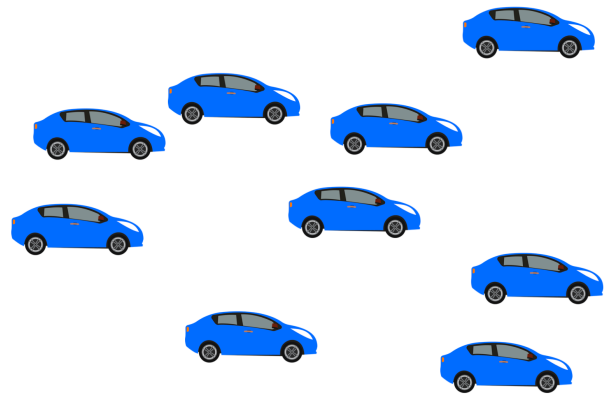
$10 + 1 =$

$5 + 2 + 2 =$

$9 - 3 =$

$13 + 4 =$

How many cars are there?



Tick the day that comes in between Saturday and Monday.

Friday

Sunday

Tuesday

Jude is 9 years old.

Theo is 6 years **older** than Jude.

How old is Theo?

Name: _____

Primary 5-a-day

Ruby



12th May


$3 + 2 =$

$6 + 4 =$

$8 - 5 =$

$17 - 5 =$

What number is **1 less** than the number on the dice?

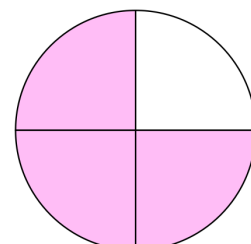
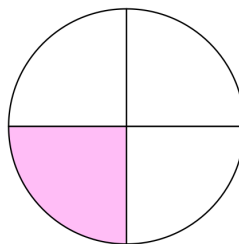
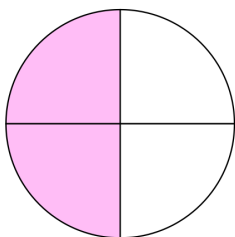


Tim has 17 cherries.
He then eats some of the cherries.
Here is how many he has left.



How many cherries did Tim eat?

Tick the circle that has **half** shaded.



Name: _____

Primary 5-a-day

Ruby



13th May




$1 + 2 =$

$18 + 2 =$


$10 + 5 =$

$9 - 4 =$

Tick the box with the **fewest** balls.



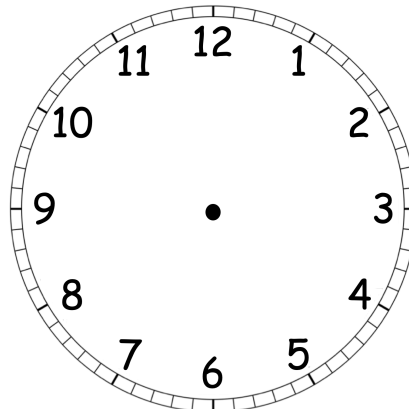
Fill in the missing numbers to make this pair of cards have a total of 12.



Fill in the missing numbers to make this pair of cards have a total of 12.



Show the time **9 o'clock** on the clock.



Name: _____

Primary 5-a-day

Ruby



14th May

$1 + 7 =$

$5 + 5 + 5 =$

$10 - 6 =$

$20 - 9 =$

Write the number that is **one more** than 80.

Martin has 6 stamps.

Nick has 5 stamps.

How many stamps do they have altogether?

Write these numbers in the correct box.

3

9

6

12

even numbers

odd numbers

Name: _____

Primary 5-a-day

Ruby



15th May

$8 - 1 =$

$3 + 4 =$

$4 + 10 =$

$13 + 5 =$

Write in the missing numbers in this pattern.

86

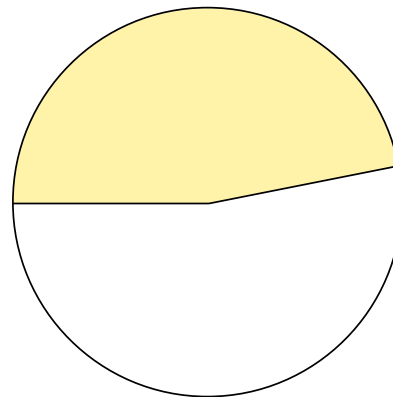
88

89

Is half of this shape shaded?

Yes

No



Write a number in each box to make a correct calculation.

+

6

+

=

13

Name: _____

Primary 5-a-day

Ruby



16th May

$5 - 4 =$

$6 + 6 =$

$10 - 7 =$

$5 +$ $= 12$

How much money is there?

 p

Write the correct number in each box.

40 is 1 more than

36 is 1 less than

There are 20 children in a class.

6 of the children are left handed and the rest are right handed.

How many children are right handed?

Name: _____

Primary 5-a-day

Ruby



17th May

$7 - 1 =$

$4 + 4 =$

$5 + 5 + 10 =$

$12 - 7 =$

Henry has 4 cars.



Oliver has 2 cars.



How many cars do they have altogether?

Write the number **forty-one** in figures.

Write an **even number** between 3 and 7.

Name: _____

Primary 5-a-day

Ruby



18th May

$1 + 5 =$

$9 - 6 =$

$2 + 2 + 6 =$

$8 + 7 =$

Add together 6 and 4.

Put these numbers in order, from smallest to biggest.

7

4

1

6

smallest

biggest

Bethan has 18 books.

She gives some of her books to Tia.

Bethan has 13 books left.

How many books did Bethan give Tia?

Name: _____

Primary 5-a-day

Ruby



19th May

$9 - 3 =$

$14 - 1 =$

$2 + 13 =$


$5 + 4 + 3 =$

Write down the number that is **one less** than 59.

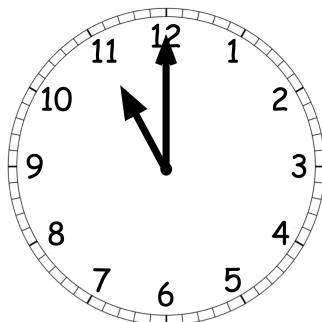
A ladybird has 4 spots on one wing.

Both wings have the same number of spots.

How many spots does the ladybird have altogether?



What time does the clock show?
Tick the correct box.



1 o'clock

11 o'clock

12 o'clock

10 o'clock

Name: _____

Primary 5-a-day

Ruby



20th May

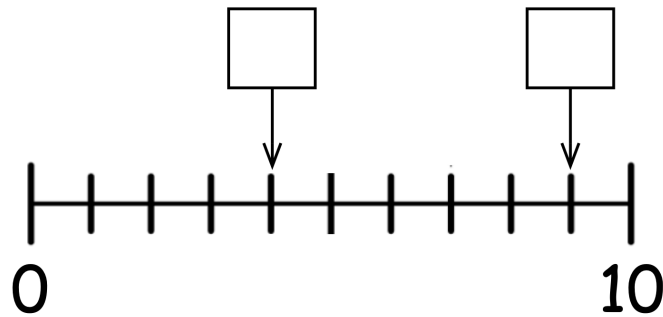
$13 + 1 =$

$10 - \square = 7$


$4 + 16 =$

$8 + 9 =$

Write the missing numbers in the boxes.




Shade **half** of this shape.



Tim has 12 cookies.

He then eats some of the cookies.

Here is how many he has left.



How many cookies did Tim eat?

Name: _____

Primary 5-a-day

Ruby



21st May

$2 + 5 =$

$+ 2 = 10$

$15 - 3 =$

$6 + 8 =$

Sort the jugs from most full to least full.

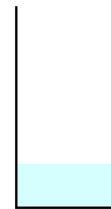
most full

least full

Jug 1



Jug 2



Jug 3



Tick the number that is spelt correctly.

32
forty-two

19
ninety

30
thirty

Circle all the **even** numbers.

8

5

7

4

3

10

Name: _____

Primary 5-a-day

Ruby



22nd May

$9 - 2 =$

$20 - 3 =$

$10 -$

$= 4$

$- 6 = 5$

Tick the calculation with the largest answer.


$6 + 2$

$10 - 1$


$4 + 4$

$9 - 2$


Circle the person with the most acorns.



Sam



Dan



Finn

There are 20 marbles in a jar.

15 marbles are taken out of the jar.

How many marbles are left?

Name: _____

Primary 5-a-day

Ruby



23rd May

$3 + 2 =$

Half of 8 is

$10 - 7 =$

$+ 6 = 17$

Circle the smallest number.

68

29

77

32

45

59

Match the numbers that **add to 20**

13

18

16

19

4

1

7

2

Write in the missing numbers in this pattern.

6

8

10

Name: _____

Primary 5-a-day

Ruby



24th May

$11 + 2 =$

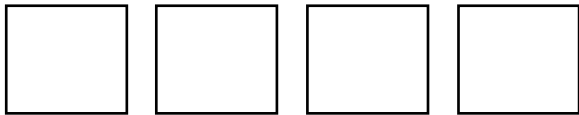
$6 + 3 =$

$5 + 7 =$

$13 +$

$= 18$

Put the lines in order of length, from shortest to longest.



shortest

longest

A 

B 

C 

D 

Tick the number **sixty**

60

16

66

Fill in the missing number to make this pair of cards have a total of 20.

15

Fill in the missing number to make this pair of cards have a total of 20.

8

Name: _____

Primary 5-a-day

Ruby



25th May

$6 - 2 =$

$3 + 8 =$

$2 + 7 =$

$13 =$

$- 2$

Write these numbers in the correct box.

31

27

18

45

less than 30

more than 30

Write the number that is
10 more than 40

Write the number that is
10 less than 80

Write the missing number in the box.

$7 + 7 = 10 +$

Name: _____

Primary 5-a-day

Ruby



26th May

$1 + 12 =$

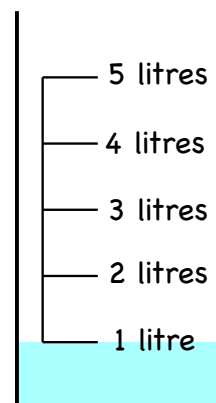
$4 +$

$= 7$

$9 + 4 =$

$3 + 16 =$

How much water is in the jug?

 litre

Circle the coins that are worth less than 10p



Here are some number cards.

4

11

2

17

Choose two of the number cards to make this correct.

-

=

6

Name: _____

Primary 5-a-day

Ruby



27th May

$$\boxed{} = 1 + 1$$

$$10 - 4 = \boxed{}$$

$$9 - 7 = \boxed{}$$

Double 3 $\boxed{}$

Which of these numbers is **less than 23** ?

$\boxed{29}$

$\boxed{26}$

$\boxed{21}$

$\boxed{}$

Here are two signs.

$\boxed{-}$

$\boxed{+}$


Write a sign in each box to make each calculation correct.

$$50 \boxed{} 2 = 52$$

$$40 \boxed{} 2 = 38$$

What is **half** of 12?

$\boxed{}$



Name: _____

Primary 5-a-day

Ruby



28th May

$8 - 1 =$

Half of 8 is

$4 + 6 =$

$15 - 6 =$

Tick the correct answer.

$2 + 3 = 6$

$6 - 2 = 4$

$1 + 4 = 6$

$7 - 2 = 4$

How much money is here?

 p

Conor throws the ball 18 metres.
Greg throws the ball 12 metres.



How much further does Conor throw
the ball than Greg?

 metres

Name: _____

Primary 5-a-day

Ruby



29th May

$5 + 5 =$

$3 + 6 =$

$11 + 7 =$

$16 - 6 =$

fifty-five

eighty-nine

forty

89

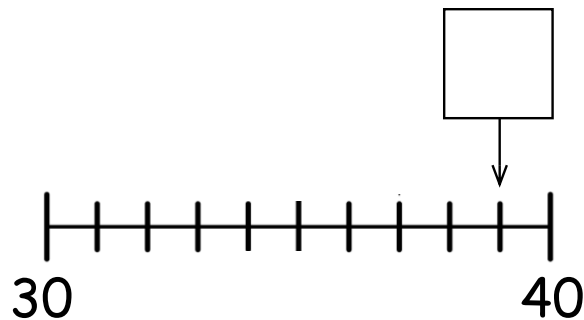
55

40

98

14

Write the missing number in the box.



There are 13 buses at a station.

9 of the buses leave.

How many buses are left?

Name: _____

Primary 5-a-day

Ruby



30th May

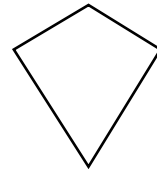
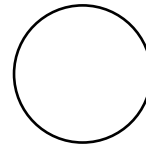
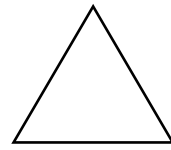
$1 + 3 =$

$10 + 4 =$

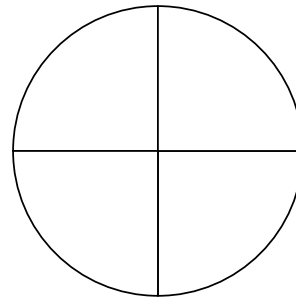
$20 - 10 =$

$19 - 17 =$

Tick the kite.



Shade a **quarter** of this shape.



Write 3 numbers to make this calculation correct.

$$\square + \square + \square = 20$$

Name: _____

Primary 5-a-day

Ruby



31st May

$4 - 4 =$

$10 - 8 =$

$1 + 1 + 1 + 1 =$

$5 +$


$= 13$

Tick the name of the shape.

Cone

Cylinder

Cuboid


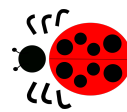


Here is a ladybird.



The ladybird makes a **half turn**.

Circle which way the ladybird now faces.



Tick the clock that shows **seven o'clock**

