

Name: _____

Primary 5-a-day

Ruby



9th May






$2 + 4 =$

$3 + 5 =$

$= 7 + 5$

$20 - 10 =$

Circle the two dice that add up to 7



Circle the coin that has the **lowest** value.



There are 9 apples in a box.

Finn puts 6 apples in the box.

Max puts 3 apples in the box.

How many apples are in the box altogether?