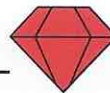


Name: \_\_\_\_\_

Primary 5-a-day

Ruby



10th May

$8 - 4 =$

4

$7 + 4 =$

11


$9 - 7 =$

16

$19 - 11 =$

8

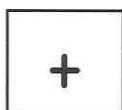
Put a tick (✓) above the chicken that is 5<sup>th</sup> in the line.



start

end

Here are some signs.



Write a sign in each box to make this correct.

$15 \square - 9 \square = 6$

Tom swims 18 metres.  
Ben swims 14 metres.



How much further did Tom swim than Ben?

$18 - 14 = 4$

4 metres