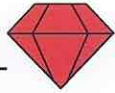


Name: _____

Primary 5-a-day

Ruby



20th May

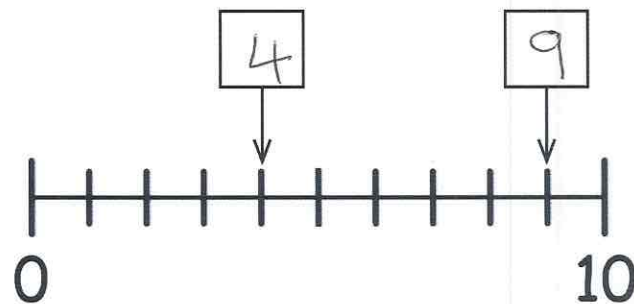
$13 + 1 = \boxed{14}$

$10 - \boxed{3} = 7$


$4 + 16 = \boxed{20}$

$8 + 9 = \boxed{17}$

Write the missing numbers in the boxes.



Shade **half** of this shape.



Tim has 12 cookies.
He then eats some of the cookies.
Here is how many he has left.



How many cookies did Tim eat?

$12 - 5 = 7$

$\boxed{7}$