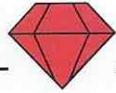


Name: _____

Primary 5-a-day

Ruby



22nd May

$9 - 2 =$

7

$20 - 3 =$

17

$10 -$

6

$= 4$

11

$- 6 = 5$

Tick the calculation with the largest answer.


$6 + 2 = 8$

$10 - 1 = 9$


$4 + 4 = 8$

$9 - 2 = 7$

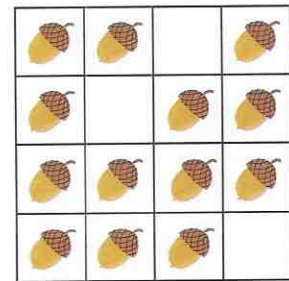
Circle the person with the most acorns.



Sam



Dan



Finn

There are 20 marbles in a jar.

15 marbles are taken out of the jar.

How many marbles are left?

$20 - 15 = 5$

5