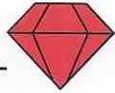


Name: _____

Primary 5-a-day

Ruby



3rd May

$4 + 2 =$

6

$10 - 1 =$

9

$6 + 9 =$

15

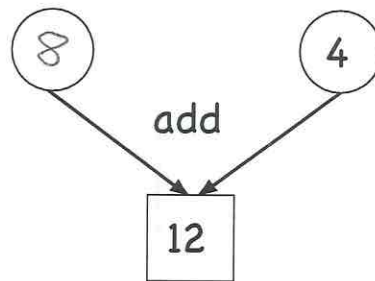
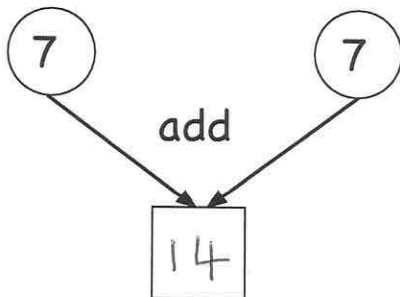
$14 - 7 =$

7

Write down the whole number that is between 13 and 15.

14

Write the missing numbers.



A movie started at 5 o'clock.

The movie ended at 8 o'clock.

How long did the movie last?

$8 - 5 = 3$

3 hours