

Name: _____

Primary 5-a-day

Ruby



25th November

$6 - 3 =$

$2 + 9 =$

$\square - 9 = 1$

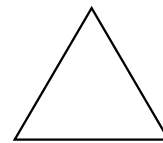
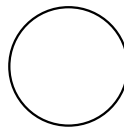

$10 + 5 + 5 =$

Match the shapes to their names.

triangle

circle

square



Tick the correct answer.

$14 + 4 = 19$

$18 - 3 = 15$

$19 - 2 = 16$

$12 + 5 = 18$

James borrowed a book from the library on Wednesday.

He brought the book back **two days later**.

Circle the day that he brought the book back.

Monday

Tuesday

Friday

Sunday