

Name: _____

Primary 5-a-day

Ruby



28th November

$8 + 3 =$




$9 + 4 =$

$10 -$

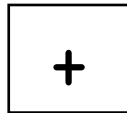
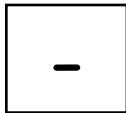
$= 2$

$4 + 3 + 2 =$

Tick the box with the **fewest** balls.



Here are two signs.



Write a sign in each box to make each calculation correct.

26

$2 = 28$

32

$2 = 30$

Tilly draws a rectangle and a square.

How many sides do these shapes have altogether?