

Name: \_\_\_\_\_

Primary 5-a-day

Ruby



3rd November

$4 + 3 =$

$7 - 5 =$

$12 + 2 =$

$18 - 3 =$

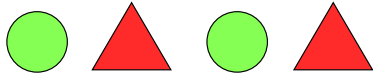
Which of these numbers is **less than 23** ?

30

24

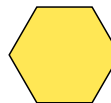

22

Here is a pattern of shapes.



?

Circle the missing shape.



Tick the square that has **half** shaded.

