

Name: _____

Primary 5-a-day

Ruby



6th November

$5 + 3 =$

$14 + 1 =$

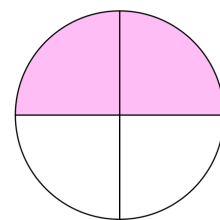
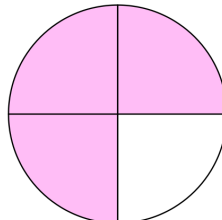
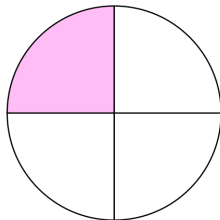
$10 -$

$= 7$

$12 + 6 =$

Write down the number that is **one more** than 29.

Tick the circle that has **one quarter** shaded.



There are 15 people on a train.

8 people get off the train.

Then 4 more people get off the train.

How many people are left on the train?