

Name: _____

Primary 5-a-day

Ruby



1st November

$8 + 1 =$

$17 - 10 =$

$10 - 3 =$

$15 - 14 =$

Finn has 2 cars.



Peter has 3 cars.



How many cars do they have altogether?

Circle the coin that has the **lowest** value.



Rosie does 9 star jumps.

Eddy does 9 star jumps.

How many star jumps have they done altogether?

Name: _____

Primary 5-a-day

Ruby



2nd November

$4 - 2 =$

$10 + 10 =$

$14 + 5 =$

$19 - 4 =$

How many sides does a rectangle have?



What is **double** Ben's number?

I am thinking
of the number

6



There are 20 people in a room.

6 people leave the room.

How many people are left?

Name: _____

Primary 5-a-day

Ruby



3rd November

$4 + 3 =$

$7 - 5 =$

$12 + 2 =$

$18 - 3 =$

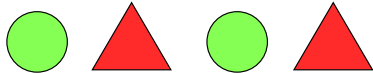
Which of these numbers is **less than 23** ?

30

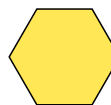

24

22

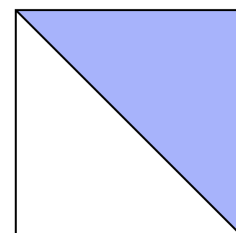
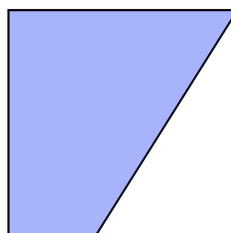
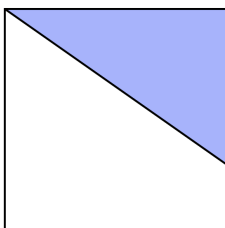
Here is a pattern of shapes.



Circle the missing shape.



Tick the square that has **half** shaded.



Name: _____

Primary 5-a-day

Ruby



4th November


$1 + 5 =$

Half of 8 is

$3 + 15 =$

$+ 9 = 16$

What number is **4 less** than the number on the dice?



Match the numbers that **add to 16**

8

10

9

15

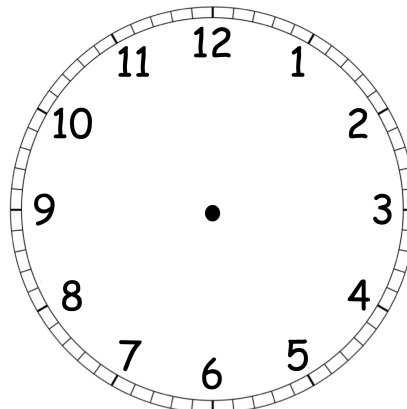
6

1

8

7

Show the time **half past nine** on the clock.



Name: _____

Primary 5-a-day

Ruby



5th November

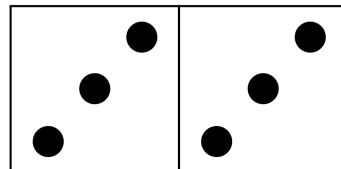
$5 - 1 =$

$2 + 3 + 4 =$

$9 + 8 =$

Double 4

How many dots are there altogether?



Tick the number that is spelt correctly.

12
twoteen

11
oneteen

16
sixteen

Fill in the missing number to make this pair of cards have a total of 15.

 13

Fill in the missing number to make this pair of cards have a total of 15.

8

Name: _____

Primary 5-a-day

Ruby



6th November

$5 + 3 =$

$14 + 1 =$

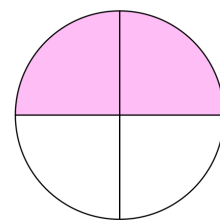
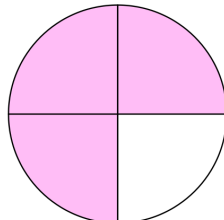
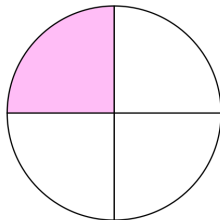
$10 -$

$= 7$

$12 + 6 =$

Write down the number that is **one more** than 29.

Tick the circle that has **one quarter** shaded.



There are 15 people on a train.

8 people get off the train.

Then 4 more people get off the train.

How many people are left on the train?

Name: _____

Primary 5-a-day

Ruby



7th November

$16 + 1 =$

$+ 12 = 17$

$9 - 8 =$

$14 - 7 =$

89 is more than 91

True

False

42 is less than 24

True

False

Circle all the **odd** numbers.

9

12

3

5

4

6

A shop sells

an apple for 10p

a banana for 8p

a strawberry for 4p

a cherry for 3p

Find the cost of



p

Name: _____

Primary 5-a-day

Ruby



8th November

$8 + 2 =$

$10 + 4 =$

$8 - 3 =$

$11 - 5 =$

Tick the day after Tuesday.

Sunday

Thursday

Wednesday

Monday

Write in the missing numbers in this pattern.

70

60

50

Milo has 14 cupcakes.

He then eats some of the cupcakes.

Here is how many he has left.



How many cupcakes did Milo eat?

Name: _____

Primary 5-a-day

Ruby



9th November

$8 - 2 =$

$2 + 11 =$

$7 + 2 =$

$12 - 8 =$

Tick the calculation with the largest answer.

$7 + 6$

$18 - 8$

$5 + 10$

$17 - 1$

This picture shows $4 + 6 = 10$

10	
4	6

Here is another picture.

Write the missing number in the box.

8	5

Ruby made 15 cupcakes.

Lottie made **9 fewer** cupcakes than Ruby.

How many cupcakes did Lottie make?

Name: _____

Primary 5-a-day

Ruby



10th November

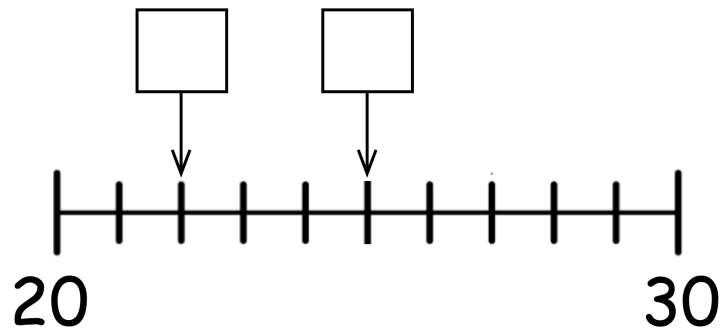
$2 - 1 =$

$17 - 3 =$

$14 - 3 =$

$13 + 7 =$

Write the missing numbers in the boxes.



How much money is there?

 p

Write down an **even number** between 3 and 7.

Name: _____

Primary 5-a-day

Ruby



11th November

$6 - 1 =$

$+ 6 = 10$

$+ 8 = 12$

$19 - 2 =$

Put a tick (✓) above the chicken that is 2nd in the line.



start

end

Write 21 in the correct box in the grid.

1	2	3	4	5	6
7	8	9	10	11	

Max has 13 cupcakes.

He then gives some cupcakes away.

Max has 5 cupcakes left.

How many cupcakes did Max give away?

Name: _____

Primary 5-a-day

Ruby



12th November

$5 - 3 =$

$14 + 6 =$

$8 + 3 =$

$9 =$

$- 10$

sixty-eight

twenty

forty-eight

12

68

20

48

84

Max cycles 15 metres.
Syd cycles 13 metres.



How much further does Max cycle than Syd?

metres

Count down in fives.

40

35

Name: _____

Primary 5-a-day

Ruby



13th November

$1 + 3 =$

$+ 2 = 4$

Half of 12 is

$+ 11 = 20$

Write in the missing numbers in this pattern.

78

79

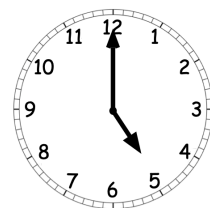
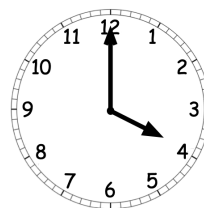
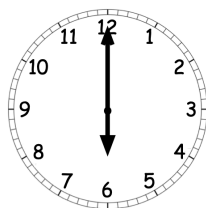
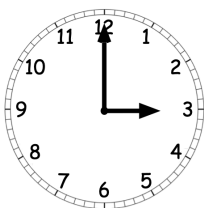
81

Austin scores 6 goals.

Leon scores 7 goals.

How many goals do they have altogether?

Tick the clock that shows **six o'clock**.



Name: _____

Primary 5-a-day

Ruby



14th November

$5 + 3 =$

$10 - 4 =$

$5 + 15 =$

$11 - 8 =$

Tick the name of the shape.

Rectangle

Triangle

Circle



Write the correct number in each box.

75 is 1 less than

90 is 1 more than

Ethan has 2 books.

Joseph has 9 books.

Miles has 4 books.

How many books do they have altogether?

Name: _____

Primary 5-a-day

Ruby



15th November

$4 + 5 =$

$6 + 6 =$

$20 - 11 =$


$18 - 8 =$

Write down three numbers that have a **total of 10**

Is half of this shape shaded?

Yes

No



Olivia has a 20p coin.

She buys a sweet for 6p.

How much change will she get back?

p

Name: _____

Primary 5-a-day

Ruby



16th November


$4 - 1 =$

$20 - 3 =$

$7 + 5 =$

$18 - 5 =$

Which candy cane is the **shortest**?



Tick the box that has 16p



Lisa has 20 cookies.

Imogen has 12 cookies.

How many more cookies does Lisa have than Imogen?

Name: _____

Primary 5-a-day

Ruby



17th November

$$7 + 2 = \square$$

$$1 + 15 = \square$$

$$10 - \square = 6$$

$$8 + 8 = \square$$

Put these numbers in order, from smallest to biggest.


smallest biggest

Tick the name of the shape.

Cuboid

Cylinder

Pyramid



Write the missing number in the box.

$$8 + 10 = 20 - \square$$

Name: _____

Primary 5-a-day

Ruby



18th November

$10 + 1 =$

$14 - 2 =$

$3 + 3 + 3 =$

Double 5

What number is **one less** than 28 ?

Here are some signs.

Write a sign in each box to make this correct.

17

2

19

There are 16 apples in a box.

6 of the apples are red and the rest are green.

How many green apples are there?

Name: _____

Primary 5-a-day

Ruby



19th November


$4 + 4 =$

$5 + 14 =$

Half of 4 is

$\square + 11 = 20$

How many balls are there?



Tick the day that comes in between Thursday and Saturday.

Sunday

Wednesday

Friday

Write the missing number in the box.

$3 + 4 + \square = 20$

Name: _____

Primary 5-a-day

Ruby



20th November

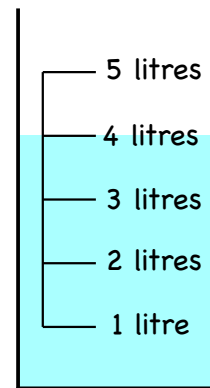
$7 - 1 =$

$8 + 3 =$

$+ 5 = 11$

$= 13 - 4$

How much water is in the jug?

 litres

Tick the number **twenty-one**

12

21

201

Write six **different** numbers in the boxes to make these correct.

$\square + \square = 13$

$\square + \square = 13$

$\square + \square = 13$

Name: _____

Primary 5-a-day

Ruby



21st November

$1 + 2 =$

$6 + 4 =$

$16 - 2 =$

$8 + 2 + 2 =$

What whole number is in between
18 and 20?

Write the number that is
10 more than 20

Write the number that is
10 less than 70

Daisy is 16 years old.

Elsie is 3 years **younger** than Daisy.

How old is Elsie?

Name: _____

Primary 5-a-day

Ruby



22nd November

$5 - 1 =$

$10 + 8 =$

$6 + 5 =$

$15 - 4 =$

Circle the largest number.

72

19

37

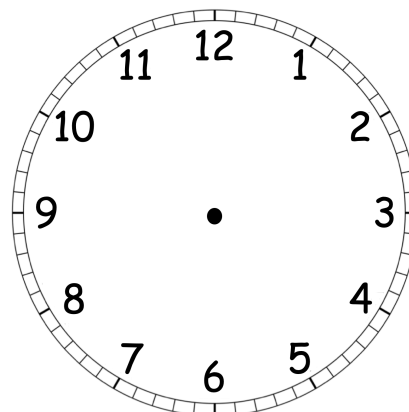
80

3

68

How many days are there in one week?

Show the time **3 o'clock** on the clock.



Name: _____

Primary 5-a-day

Ruby



23rd November

$3 - 2 =$

$2 + 11 =$

$8 + 11 =$

$17 - 14 =$

What number is **one more** than 27 ?

Write the number **eighty-nine** in figures.

Scott needs 17 books.

He only has 9 books.

How many more books does Scott need?

Name: _____

Primary 5-a-day

Ruby



24th November

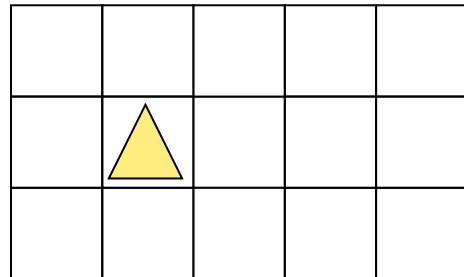
$3 + 5 =$

$10 - 10 =$

$20 - 19 =$

$6 + 7 =$

Put a tick in the square **above** the triangle.



Circle the coins that are worth **more than** 5p



Tick the shape shown.

Cone

Sphere

Pyramid



Name: _____

Primary 5-a-day

Ruby



25th November

$6 - 3 =$

$2 + 9 =$

$\square - 9 = 1$

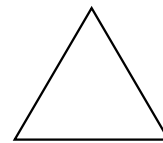
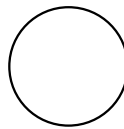

$10 + 5 + 5 =$

Match the shapes to their names.

triangle

circle

square



Tick the correct answer.

$14 + 4 = 19$

$18 - 3 = 15$

$19 - 2 = 16$

$12 + 5 = 18$

James borrowed a book from the library on Wednesday.

He brought the book back **two days later**.

Circle the day that he brought the book back.

Monday

Tuesday

Friday

Sunday

Name: _____

Primary 5-a-day

Ruby



26th November

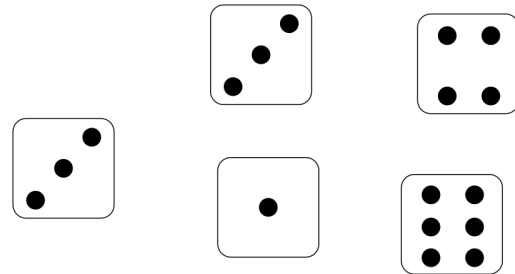
$8 - 1 =$

$4 + 2 =$

$19 - 12 =$

$3 + 4 + 5 =$

Circle two dice that add up to 6



Write the missing number in the box.

$10 - 2 = 1 +$

Write these numbers in the correct box.

1

12

4

9

even numbers

odd numbers

Name: _____

Primary 5-a-day

Ruby



27th November

$5 + 5 =$

$3 + 6 =$


$20 - 4 =$

$9 + 7 =$

Megan bakes 10 cupcakes.

She gives 6 cupcakes away.

How many does she have left?



Circle the **months of the year**

December

Tuesday

May

September

Sunday

Add together these numbers.

3

8

9

Name: _____

Primary 5-a-day

Ruby



28th November

$8 + 3 =$


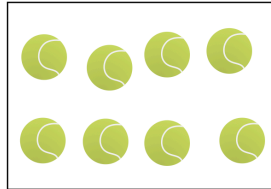

$9 + 4 =$

$10 -$

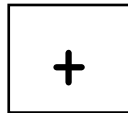
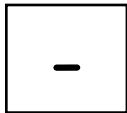
$= 2$

$4 + 3 + 2 =$

Tick the box with the **fewest** balls.



Here are two signs.



Write a sign in each box to make each calculation correct.

26

$2 = 28$

32

$2 = 30$

Tilly draws a rectangle and a square.

How many sides do these shapes have altogether?

Name: _____

Primary 5-a-day

Ruby



29th November

$$\boxed{} + 8 = 10$$

$$16 + 2 = \boxed{}$$

$$7 + 6 = \boxed{}$$

$$15 - 6 = \boxed{}$$

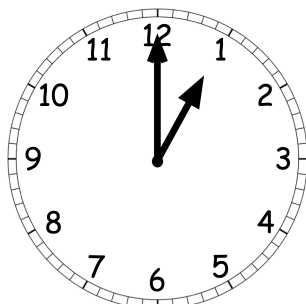
Add together 3 and 5.

Tim has 8 books.

Jenny has **3 more** books than Tim.

How many books does Jenny have?

What time does the clock show?
Tick the correct box.



1 o'clock

3 o'clock

12 o'clock

2 o'clock

Name: _____

Primary 5-a-day

Ruby



30th November

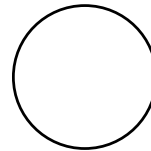
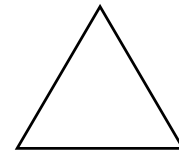
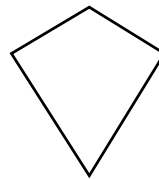
$9 + 1 =$

$8 + 6 =$

$15 - 11 =$

$+ 6 = 20$

Tick the kite.



Write 3 numbers to make this calculation correct.

$\square + \square + \square = 15$

An apple costs 18p

A banana costs 5p less than an apple.

How much does a banana cost?

p