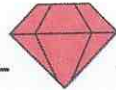


Name: \_\_\_\_\_

Primary 5-a-day

Ruby



16th November

$4 - 1 =$

3

$20 - 3 =$

17

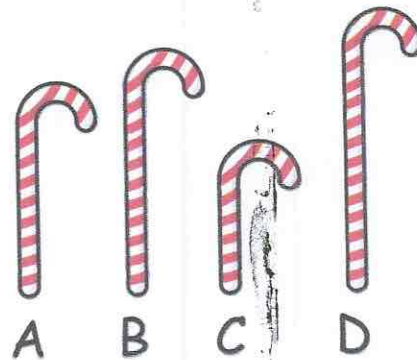
$7 + 5 =$

12

$18 - 5 =$



13

Which candy cane is the **shortest**?



C

Tick the box that has 16p



Lisa has 20 cookies.

Imogen has 12 cookies.

How many more cookies does Lisa have than Imogen?

8