


Name: \_\_\_\_\_

Primary 5-a-day

Ruby 

30th November


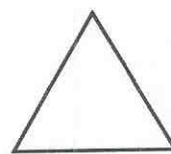
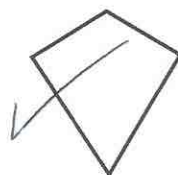
$9 + 1 =$

$8 + 6 =$

$15 - 11 =$

$+ 6 = 20$

Tick the kite.



Write 3 numbers to make this calculation correct.

+

+

=

15

An apple costs 18p

A banana costs 5p less than an apple.

How much does a banana cost?