

Name: _____

Primary 5-a-day

Ruby



6th November

$5 + 3 =$

8

$14 + 1 =$

15

$10 -$

3

$= 7$

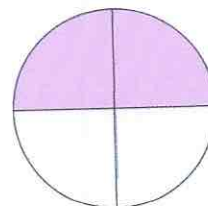
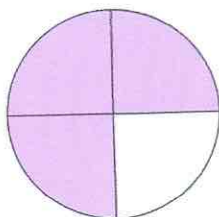
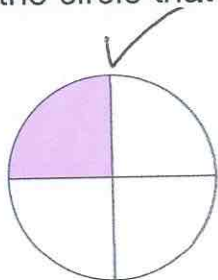
$12 + 6 =$

18

Write down the number that is **one more** than 29.

30

Tick the circle that has **one quarter** shaded.



There are 15 people on a train.

8 people get off the train.

Then 4 more people get off the train.

How many people are left on the train?

$15 - 8 - 4 = 3$

3