

Name: \_\_\_\_\_

Primary 5-a-day

Ruby



14th October

$3 + 3 =$

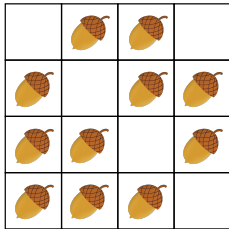
$10 -$

$= 3$


$20 - 2 =$

Half of 10 is

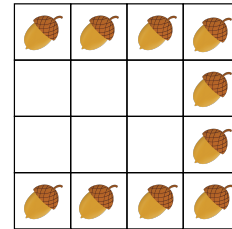
Circle the person with the fewest acorns.



Grace



Beth



Lucy

How much money is there?



p

Write the missing number in the box.

$10 + 4 = 7 +$