

Name: _____

Primary 5-a-day

Ruby



16th October

$7 - 5 =$

$14 - 4 =$


$18 - 1 =$

$14 + 2 + 2 =$

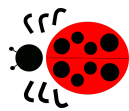
Harry has 12 apples.

He eats 7 apples.

How many are left?




Here is a ladybird.



The ladybird makes a **half turn**.

Circle which way the ladybird now faces.



Tick the rectangle that has **half** shaded.

