

Name: \_\_\_\_\_

Primary 5-a-day

Ruby



26th October




$4 - 3 =$

$2 + 12 =$

$11 + 9 =$

$3 + 4 + 5 =$

Tick the box with the **most** balls.



Oliver has 3 coins.

Ben has **double** the number of coins that Oliver has.

How many coins does Ben have?

Sally needs 13 rulers.

She only has 8 rulers.

How many more rulers does Sally need?