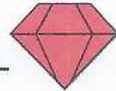


Name: _____

Primary 5-a-day

Ruby



1st October

$14 + 1 =$

15

$11 + 6 =$

17

$3 +$

7

$= 10$

$12 - 3 =$

9

forty-six

nineteen

thirty-seven

90

37

46

73

19

Hannah has 5 books.

Jordan has 11 books.

How many books do they have altogether?

$5 + 11 = 16$

16

Count up in fives.

5

10

15

20

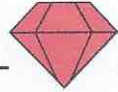
25

30

Name: _____

Primary 5-a-day

Ruby



2nd October

$7 + 2 =$

9

$10 - 9 =$

1

$8 + 4 =$

12

$13 - 7 =$

6

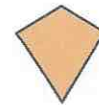
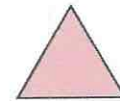
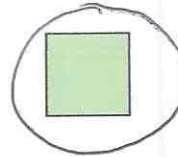
How many sides does a square have?

4

Here is a pattern of shapes.



Circle the missing shape.



Fill in the missing number to make this pair of cards have a total of 20.

5

15

Fill in the missing number to make this pair of cards have a total of 20.

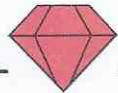
14

6

Name: _____

Primary 5-a-day

Ruby



3rd October

$7 - 1 =$

6

$9 + 3 =$

12

$3 + 10 =$

13

$18 - 4 =$

14

Circle the coin that has the **highest** value.



Katie has 20 marbles.

Erin has 15 marbles.

How many more marbles does Katie have than Erin?

$20 - 15 = 5$

5

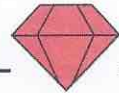
Write a number in each box to make a correct calculation.

$\boxed{3} + 15 + \boxed{2} = 20$

Name: _____

Primary 5-a-day

Ruby



4th October

$1 + 8 =$

9

$9 - 4 =$

5

$10 -$

5

$= 5$

Double 9

18

Hester has 3 bananas.



Holly has 5 bananas.



How many bananas do they have altogether?

$3 + 5 = 8$

Write the correct number in each box.

63 is 1 more than

62

84 is 1 less than

85

Circle all the **even** numbers.

1

8

4

7

10

5

Name: _____

Primary 5-a-day

Ruby



5th October

$3 + 5 =$

8

$18 - 3 =$

15

$10 + 9 =$

19

Double 3

6

Write in the missing numbers in this pattern.

16

14

12

10

8

Conor hits the ball 11 metres.
Greg hits the ball 6 metres.



How much further does Conor hit the ball than Greg?

$11 - 6 = 5$

5 metres

Tick the day that is **two days after Monday**

Tuesday

Thursday

Wednesday ✓

Name: _____

Primary 5-a-day

Ruby



6th October

$5 + 5 =$

10

$1 + 17 =$

18

$19 - 15 =$


4

$16 - 7 =$

9

How many sunflowers are there?

12



Match the numbers that **add to 20**

14

11

18

17

3

6

9

2

Jasper has 6 sweets.

Micah has twice as many sweets as Jasper.

How many sweets does ^{Micah}~~Jasper~~ have?

12

Name: _____

Primary 5-a-day

Ruby



7th October

$2 + 2 + 2 =$

6

$17 - 7 =$

10

$4 + 13 =$

17

$2 =$

11

$- 9$

Which dog is the **largest**?



A

B

C

D

D

This picture shows $1 + 2 = 3$

3	
1	2

Here is another picture.

Write the missing number in the box.

12	
6	6

There are 20 cakes.

8 cakes are eaten.

How many cakes are left?

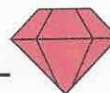
$20 - 8 = 12$

12

Name: _____

Primary 5-a-day

Ruby



8th October

$2 + 4 =$

6

$16 - 10 =$

6


$12 + 7 =$

19

$11 - 5 =$

6

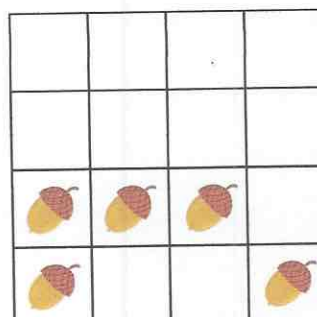
What number is **5 more** than the number on the dice?



10

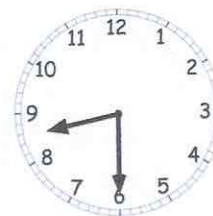
How many acorns are needed to fill the grid?

$16 - 5 = 11$



11

Tick the clock that shows **half past seven**



Name: _____

Primary 5-a-day

Ruby



9th October

$1 + 3 =$

4

$7 - 4 =$

3

$10 - 6 =$

4

$17 - 15 =$

2

Write in the missing numbers in this pattern.

56

57

58

59

60

61

Tick the day before Saturday.

Sunday

Thursday

Friday ✓

Monday

Tim has 20 cards.

He gives some of his cards to Ella.

Tim has 11 cards left.

How many cards did Tim give Ella?

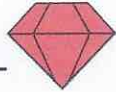
$20 - 11 = 9$

9

Name: _____

Primary 5-a-day

Ruby



10th October

$4 + 2 =$

6

$11 + 6 =$

17

$10 -$

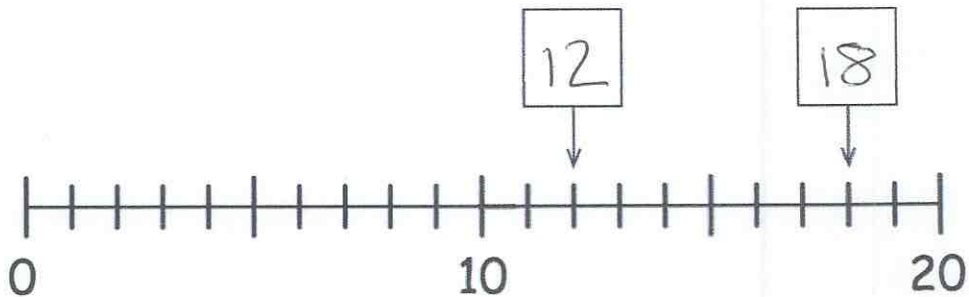
6

$= 4$

$15 - 9 =$

6

Write the missing numbers in the boxes.



Tick the number that is spelt correctly.

34
twenty-four

17
seventy

42
forty-two ✓

There are 4 people in a room.

8 people enter the room.

Then 3 more people enter the room.

How many people are now in the room?

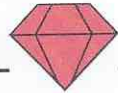
$4 + 8 + 3 = 15$

15

Name: _____

Primary 5-a-day

Ruby



11th October

$1 + 1 =$

2

$14 - 1 =$

13

$8 + 4 =$

12

$8 +$

9

$= 17$

Make each statement correct by writing **more** or **less** in each box.

17 is than 20

74 is than 55

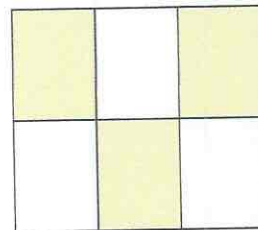
16 is than 27

Is half of this shape shaded?


Yes



No



Anwen has 11 strawberries.
She then eats some strawberries.
Here is how many she has left.



How many strawberries did Anwen eat?

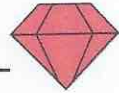
$11 - 3 = 8$

8

Name: _____

Primary 5-a-day

Ruby



12th October

$9 - 1 =$

8

$14 - 2 =$

12

$4 + 5 =$

9

12

$+ 8 = 20$

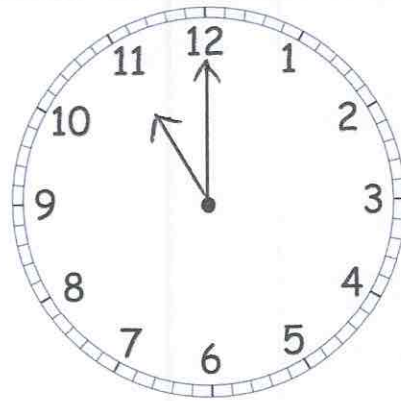
Put a tick (✓) above the penguin that is 3rd in the line.



start

end

Show the time **11 o'clock** on the clock.



Penny has 20 sweets.

She gives 17 sweets away.

How many sweets does Penny have left?

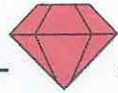
$20 - 17 = 3$

3

Name: _____

Primary 5-a-day

Ruby



13th October


$1 + 12 = \boxed{13}$

Half of 2 is

$8 + 10 = \boxed{18}$

$17 - 13 = \boxed{4}$

How many dots are there altogether?

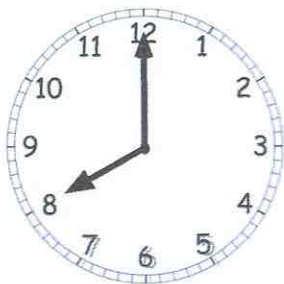


There are 10 pens in a tub.
3 of the pens are green and the rest are blue.

$10 - 3 = 7$

How many blue pens are there?

What time does the clock show?
Tick the correct box.



12 o'clock

half past 8

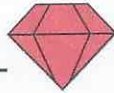
half past 7

8 o'clock

Name: _____

Primary 5-a-day

Ruby



14th October

$3 + 3 =$

6

$10 -$

7

$= 3$

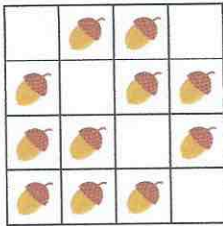
$20 - 2 =$

18

Half of 10 is

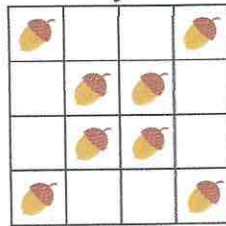
5

Circle the person with the fewest acorns.



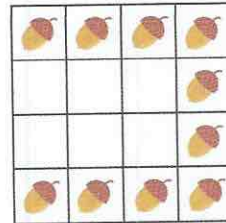
11

Grace



8

Beth



10

Lucy

How much money is there?



14 p

Write the missing number in the box.

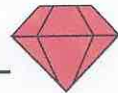
$10 + 4 = 7 +$

7

Name: _____

Primary 5-a-day

Ruby



15th October

$10 - 5 =$

5

$2 + 13 =$

15

$1 + 8 =$

9

11

$+ 4 = 15$

Jasmine has 7 books.

Sophie has **3 more** books than Jasmine.

How many books does Sophie have?

$7 + 3 = 10$

10

Write the number that is **2 more than 6**

8

Write the number that is **2 less than 16**

14

Write down three numbers that have a **total of 20**

3

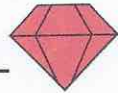
10

7

Name: _____

Primary 5-a-day

Ruby



16th October

$7 - 5 =$

2

$14 - 4 =$

10

$18 - 1 =$

17

$14 + 2 + 2 =$

18


Harry has 12 apples.

He eats 7 apples.

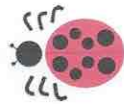
How many are left?

$12 - 7 = 5$

5

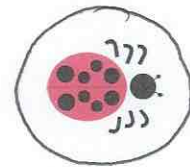


Here is a ladybird.





The ladybird makes a **half turn**.

Circle which way the ladybird now faces.



Tick the rectangle that has **half** shaded.



Name: _____

Primary 5-a-day

Ruby



17th October

$5 + 5 =$

10

$4 + 14 =$

18



$11 - 7 =$

4

Double 2

4

Tick the box that has 12p



Tick the number **sixty-two**

26

602

62 ✓

Tick the wrong answer.

$17 - 2 = 15$

$7 + 6 = 15$ ✓

$12 - 8 = 4$

$13 + 5 = 18$

Name: _____

Primary 5-a-day

Ruby



18th October

$1 + 4 =$

5

$15 - 5 =$

10

$10 - 7 =$

3

$7 + 5 =$

12

Tick the calculation with the largest answer.

$4 + 3 = 7$

$10 - 4 = 6$

$2 + 6 = 8$

$9 - 2 = 7$

Circle the coins that are worth less than 10p



Otis is 13 years old.

Alfred is 7 years **older** than Otis.

How old is Alfred?

$13 + 7 = 20$

20

Name: _____

Primary 5-a-day

Ruby



19th October

$9 + 2 =$

11

$2 + 15 =$

17

$10 -$

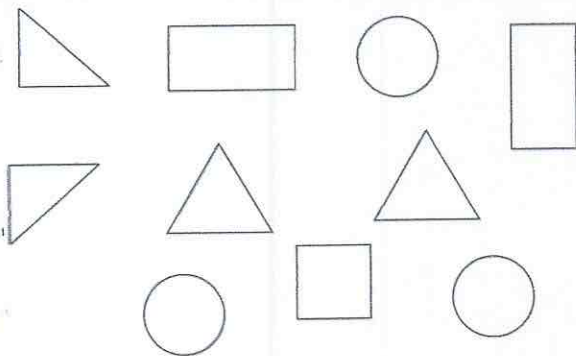
2

$= 8$

$8 + 9 =$

17

How many triangles are there?



4

A shop sells

an apple for 11p

a banana for 9p

a strawberry for 5p

a cherry for 3p

Find the cost of



$9 + 5 + 3$

17 p

Ezra has 6 cakes.

Jack has 7 cakes.

Owen has 3 cakes.

How many cakes do they have altogether?

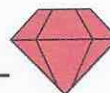
$6 + 7 + 3 = 16$

16

Name: _____

Primary 5-a-day

Ruby



20th October

$2 + 1 =$

3

$16 - 2 =$

14

$17 - 6 =$

11

$9 + 9 =$

18

Tick the day that comes in between Monday and Wednesday.

Thursday

Tuesday ✓

Sunday

Tick the correct answer.

$20 - 5 = 15$ ✓

$6 + 6 = 13$

$15 - 3 = 11$

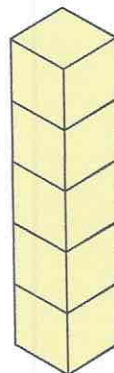
$8 + 5 = 14$

Megan wants to build a tower that is 20 blocks tall.

How many more blocks does she need?

$20 - 5 = 15$

15



Name: _____

Primary 5-a-day

Ruby



21st October

$1 - 1 =$

0

$2 + 6 =$

8

$7 + 7 =$

14

$17 - 9 =$

8

Add together 3 and 2.

5

Which of these numbers is **more than** 47 ?

45

48

46

48

Tilly draws a triangle and a square.

How many sides do these shapes have altogether?

$4 + 3 = 7$

7

Name: _____

Primary 5-a-day

Ruby 

22nd October

$1 + 7 =$

8

$3 + 8 =$

11

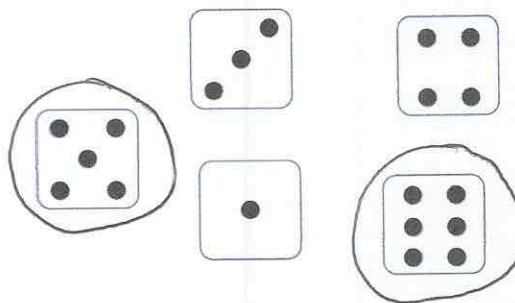
$12 + 2 =$

14

$13 - 5 =$

8

Circle two dice that add up to 11




Flynn had 7 tennis balls.

Logan gave Flynn some more tennis balls.

How many tennis balls did Logan give Flynn?

$16 - 7 = 9$



9

Write these numbers in the correct box.

2

5

10

11

even numbers

2

10

odd numbers

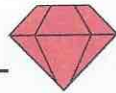
5

11

Name: _____

Primary 5-a-day

Ruby



23rd October

$3 - 2 =$

$- 5 = 3$

$10 + 3 + 3 =$

$17 - 9 =$

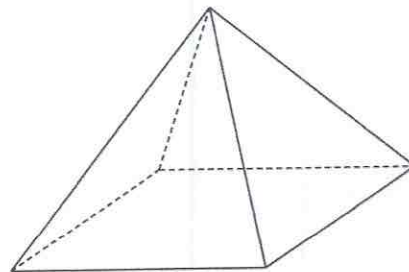
Write down the number that is **one more** than 13.

Tick the name of the shape.

Cone

Cube

Pyramid ✓



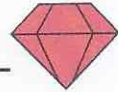
Write the missing number in the box.

$13 + 3 = 18 -$

Name: _____

Primary 5-a-day

Ruby



24th October

$6 - 3 =$

3

$17 - 1 =$

16

$6 + 12 =$

18

$16 + 3 =$

19

Here are some signs.

=

-

+

Write a sign in each box to make this correct.

5

+

8

=

13

Write the number **fifty-one** in figures.

51

Circle the day that is **two days before** Thursday.

Monday

Tuesday

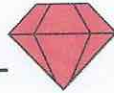
Friday

Sunday

Name: _____

Primary 5-a-day

Ruby



25th October

$2 + 3 =$

5

16

$+ 4 = 20$

$9 + 10 =$

19

$5 + 5 + 10 =$

20

Write down the number that is **one less** than 30.

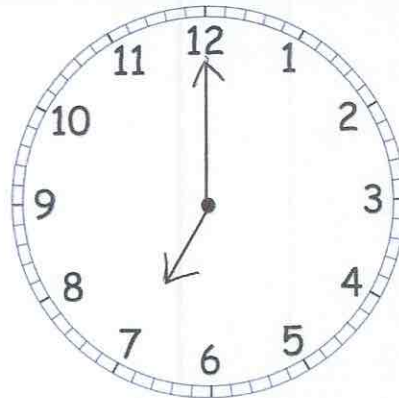
29

Ella is counting up in tens to 50.

Shade the rest of the numbers that she will say.

1	2	3	4	5	6	7	8	9	10
11	12	13	14	15	16	17	18	19	20
21	22	23	24	25	26	27	28	29	30
31	32	33	34	35	36	37	38	39	40
41	42	43	44	45	46	47	48	49	50

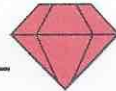
Show the time **7 o'clock** on the clock.



Name: _____

Primary 5-a-day

Ruby



26th October

$4 - 3 =$

$2 + 12 =$


$11 + 9 =$

$3 + 4 + 5 =$


Tick the box with the **most** balls.



8



7



6

Oliver has 3 coins.

Ben has **double** the number of coins that Oliver has.

How many coins does Ben have?

Sally needs 13 rulers.

She only has 8 rulers.

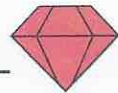
How many more rulers does Sally need?

$13 - 8 = 5$

Name: _____

Primary 5-a-day

Ruby



27th October

$6 + 1 =$

7

$20 - 6 =$

14

10

$- 1 = 9$

$12 - 4 =$

8

Write down the whole number that is between 20 and 22.

21

Circle the **months of the year**

Saturday

January

December

October

Tuesday

There are 20 boys.

12 boys leave.

How many boys are left?

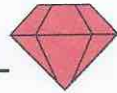
$20 - 12 = 8$

8

Name: _____

Primary 5-a-day

Ruby



28th October

$10 - 2 =$

8

$18 - 1 =$

17

$12 + 6 =$

18

$20 -$

6

$= 14$

Put these numbers in order, from smallest to biggest.

7

5

13

8

5

7

8

13

smallest

biggest

Write 3 numbers to make this calculation correct.

$$\boxed{10} + \boxed{5} + \boxed{3} = 18$$

Write the number **thirteen** in figures.

13

Name: _____

Primary 5-a-day

Ruby



29th October

$7 - 7 =$

$10 - 1 =$

$15 + 2 =$

$14 - 7 =$

Write down the number that is **one less** than 22.

Circle the smallest number.

30

22

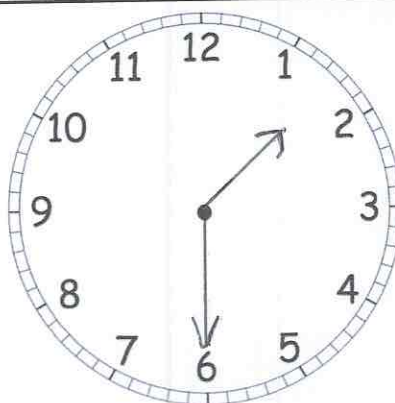
15

27

19

11

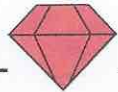
Show the time **half past one** on the clock.



Name: _____

Primary 5-a-day

Ruby



30th October

$3 + 3 =$

6

$13 - 2 =$

11

$5 + 13 =$

18

$19 - 4 =$

15

Olivia has a 5p coin.

She buys a sweet for 3p.

How much change will she get back?

$5 - 3 = 2$

2 p

Here are two signs.

-

+

Write a sign in each box to make each calculation correct.

$16 \square - 1 = 15$

$29 \square + 1 = 30$

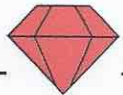
Write down the number that is **ten more** than 50.

60

Name: _____

Primary 5-a-day

Ruby



31st October

$4 + 4 =$

8

$\boxed{7} + 3 = 10$

$9 + 9 =$

18

$17 - 7 =$

10

Write down an **even number** between 5 and 9.

6 or 8

Write four **different** numbers in the boxes to make these correct.

$\boxed{18} - \boxed{6} = 12$

$\boxed{14} - \boxed{2} = 12$

An apple costs 15p

A banana costs 4p more than an apple.

How much does a banana cost?

$15 + 4 = 19$

19 p